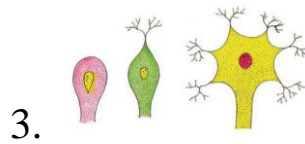
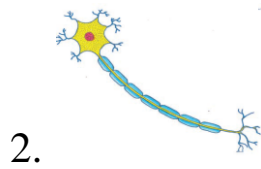
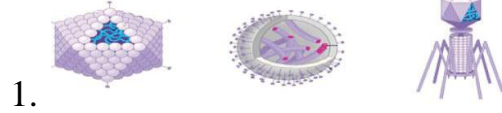
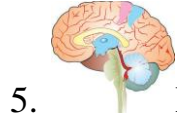


DIAGRAM BASED -SPECIAL QUESTION PAPER (2016-17)**Class: X STD****Subject: SCIENCE****MARKS: 100****TIME: 2 Hrs****I.DRAW (any50)THE PARTS OF THE FOLLOWING (50 x 2 = 100)**

Mark the Major internal parts of the human brain



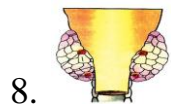
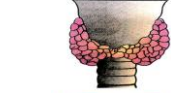
Mark the Functional areas of human brain



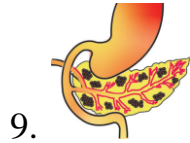
Mark Endocrine System in Human



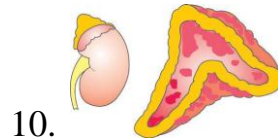
Mark the parts of pituitary gland




Mark the parts in Thyroid Gland of Dorsa & Ventral view





Mark the parts in Islets of Langerhans





Mark the parts in Adrenal gland

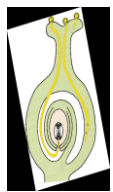
11.  Mark the parts of Bryophyllum


12.  Mark the parts of Androecium


13.  Label the Parts of a Flower

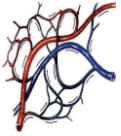
14.  Label the Parts of Gynoecium


15.  Label the Parts in Germination of Pollen grain


16.  Label the Parts in the given diagram

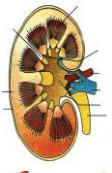
17.  Marks the parts both seeds


18.  Marks the parts in the given Human Heart.


19.  Label the Parts in the given diagram


20.  Identify the blood cells

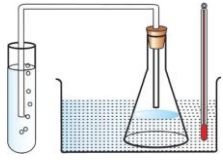
21.  Marks the parts in Excretory System of Man

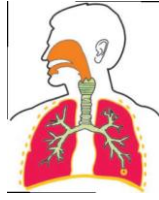
22.  Marks the parts in LS of Kidney


23.  Marks the parts in Nephron

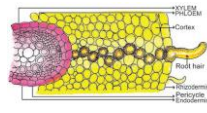
24.  Label the animals Basic pattern of forelimbs of vertebrates

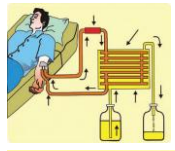
25.  Marks the parts in Human Digestive System


26.  Label the Parts in the given diagram

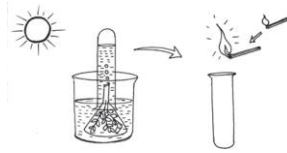
27.  Marks the parts in Human Respiratory System

28.  Marks the parts in Root hair region

29.  Marks the parts in Path of water across the root

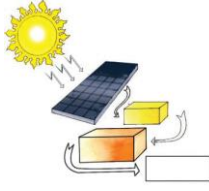
30.  Label the Parts in the given diagram

31.  Label the Parts in the given diagram

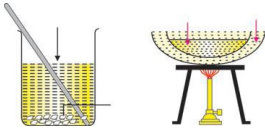
32.  Label the Parts in the given diagram



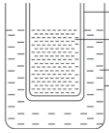
33. Label the Parts in Rain water harvesting



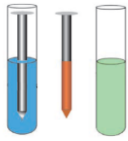
34. Label the Parts in the given diagram



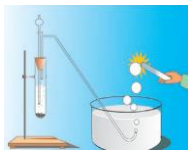
35. Label the Parts in the given diagram



36. Label the Parts in the given diagram



37. Label the Parts in the given diagram



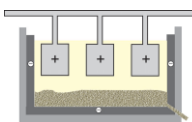
38. Label the Parts in the given diagram



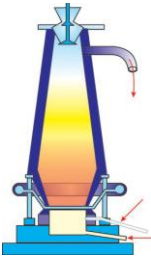
39. Label the Parts in the given diagram




40. Label the Parts in the given diagram



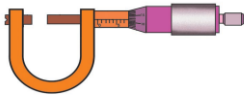
41. Label the Parts in the given diagram



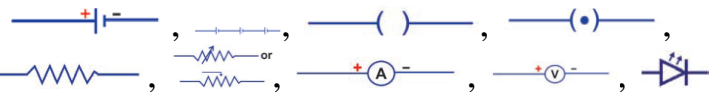
42. Label the Parts in the given diagram

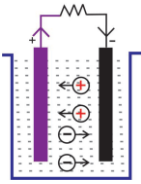


43. Mark the parts in the given diagram

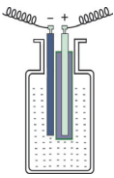


44. Label the parts in screw gauge

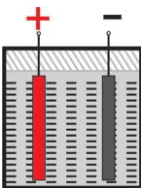
45. Write the components of 



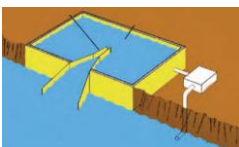
46. Mark the parts in the given diagram



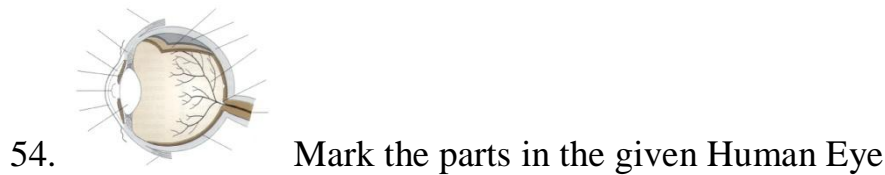
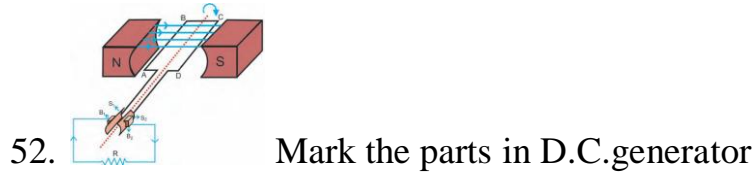
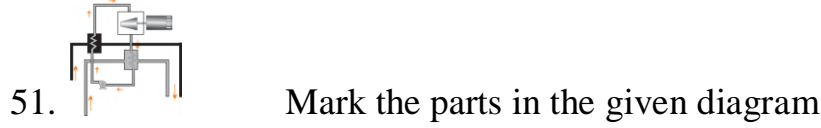
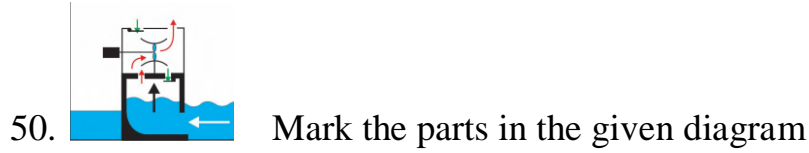
47. Mark the parts in the given diagram



48. Mark the parts in the given diagram



49. Mark the parts in the given diagram



- PREPARED FOR THE BETTERMENT OF ALL CHILDREN

T.S.SARAVANAN S/O P.SIVABALAN

B.Sc(Chem),B.Ed.,M.A(Eng.Lit),M.Phil(Eng.Lit),B.A(His),

KARUMALAIKODAL

METTUR DAM (R.S),SALEM (D.T), - 636402

EMAIL; sharavananvepp@gmail.com

For conversation: 8675509227,9042331256

